

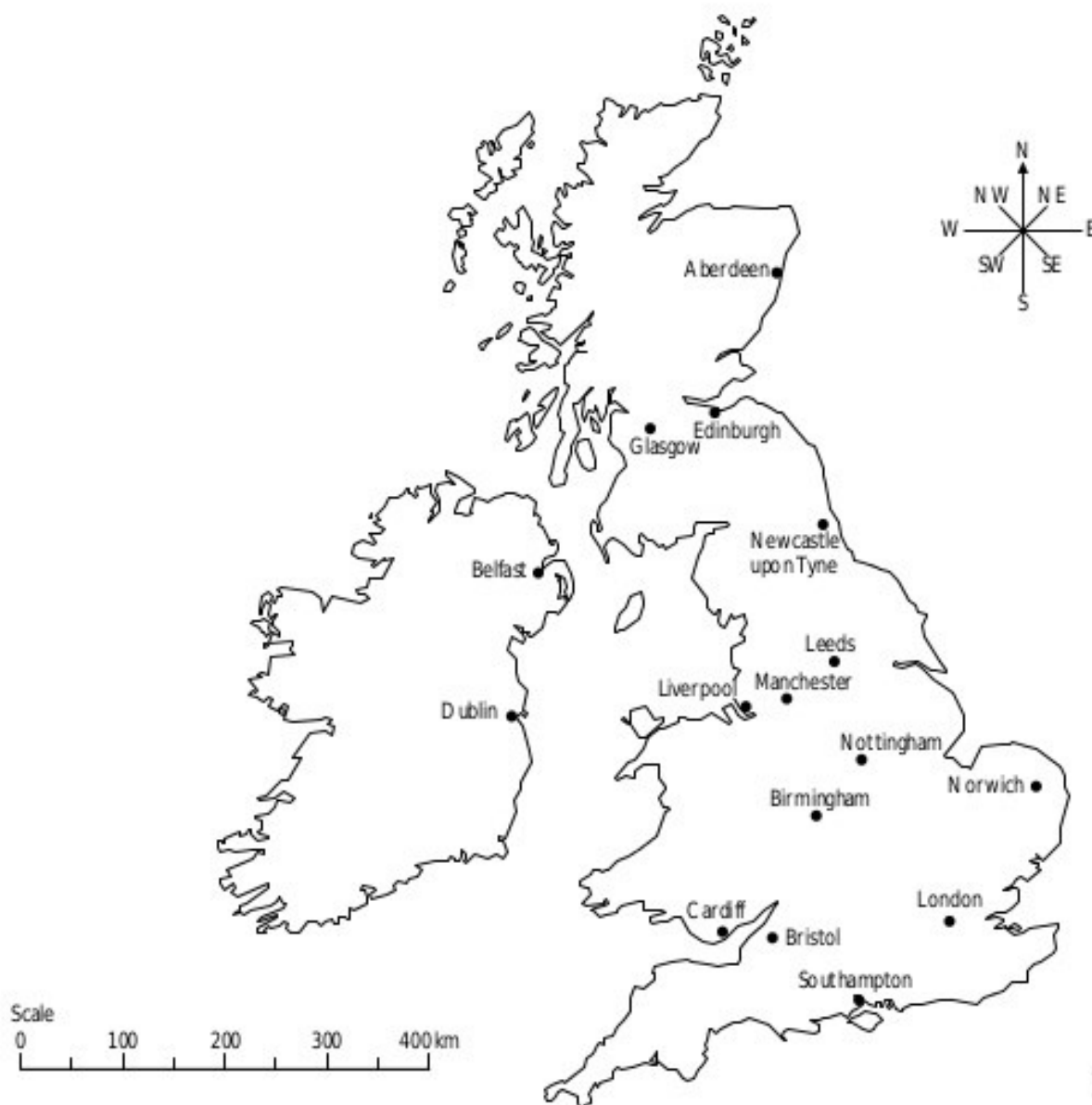
Journeys in the British Isles

Your task

For each of the journeys in the table on the right:

- a) state the direction in which you would travel
 b) measure the distance that you would travel (to the nearest 25 km).

From	To	Direction	Distance
London	Birmingham	NW	200 km
Dublin	Newcastle		
Aberdeen	Manchester		
Bristol	Belfast		
Glasgow	Leeds		
Norwich	Southampton		
Liverpool	Cardiff		
Nottingham	Edinburgh		



Name _____

Date _____

300-E



Answer the following questions based on the map and your knowledge of geography.



Which of the following cities is not on Australia's east coast?

- Cairns
- Melbourne
- Newcastle
- Brisbane

Which of the following continents is located furthest from Australia?

- Asia
- South America
- Europe
- Antarctica

What is the approximate distance between Port Macquarie and Alice Springs?

- 400 miles
- 600 miles
- 800 miles
- 1,000 miles

What is the capital of Australia?

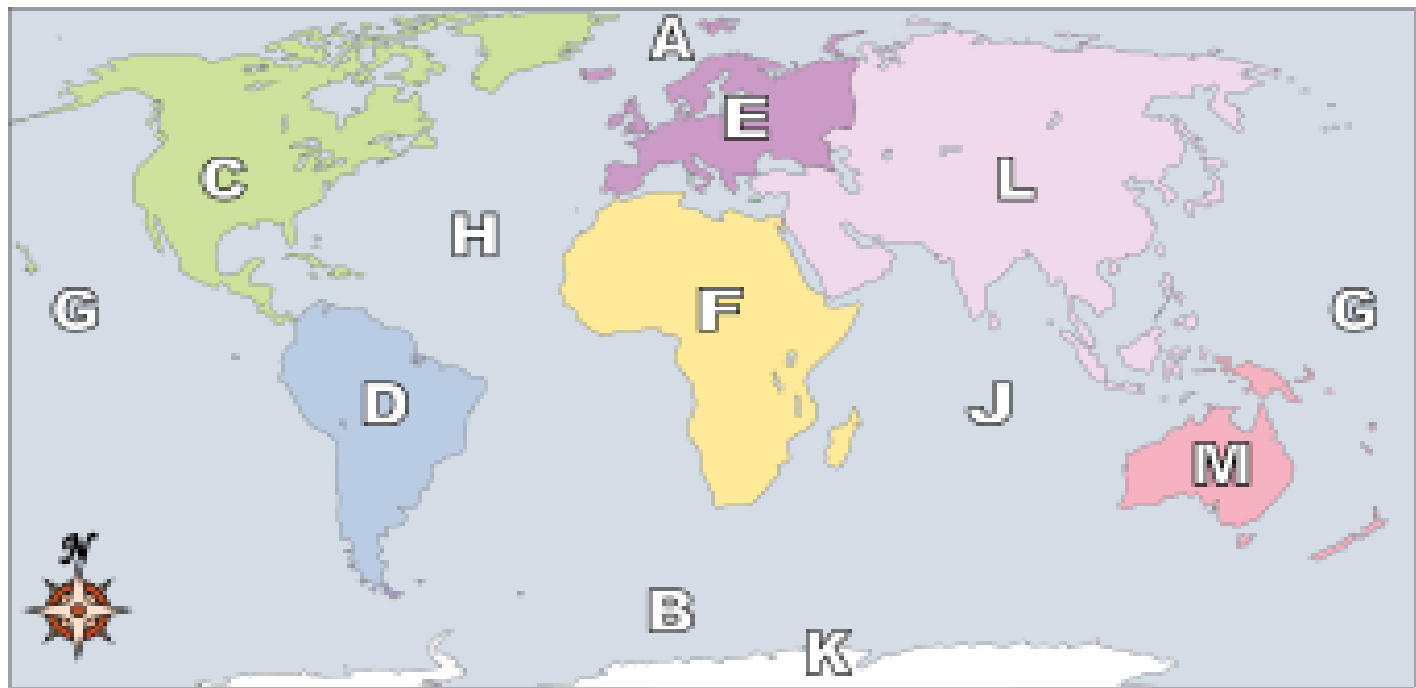
- Perth
- Canberra
- Brisbane
- Sydney

What large body of water lies north-west of Australia?

- Victoria
- Great Ocean Road
- Tasmania
- Bass Strait



Using the map below, determine which letter represents each continent or ocean.

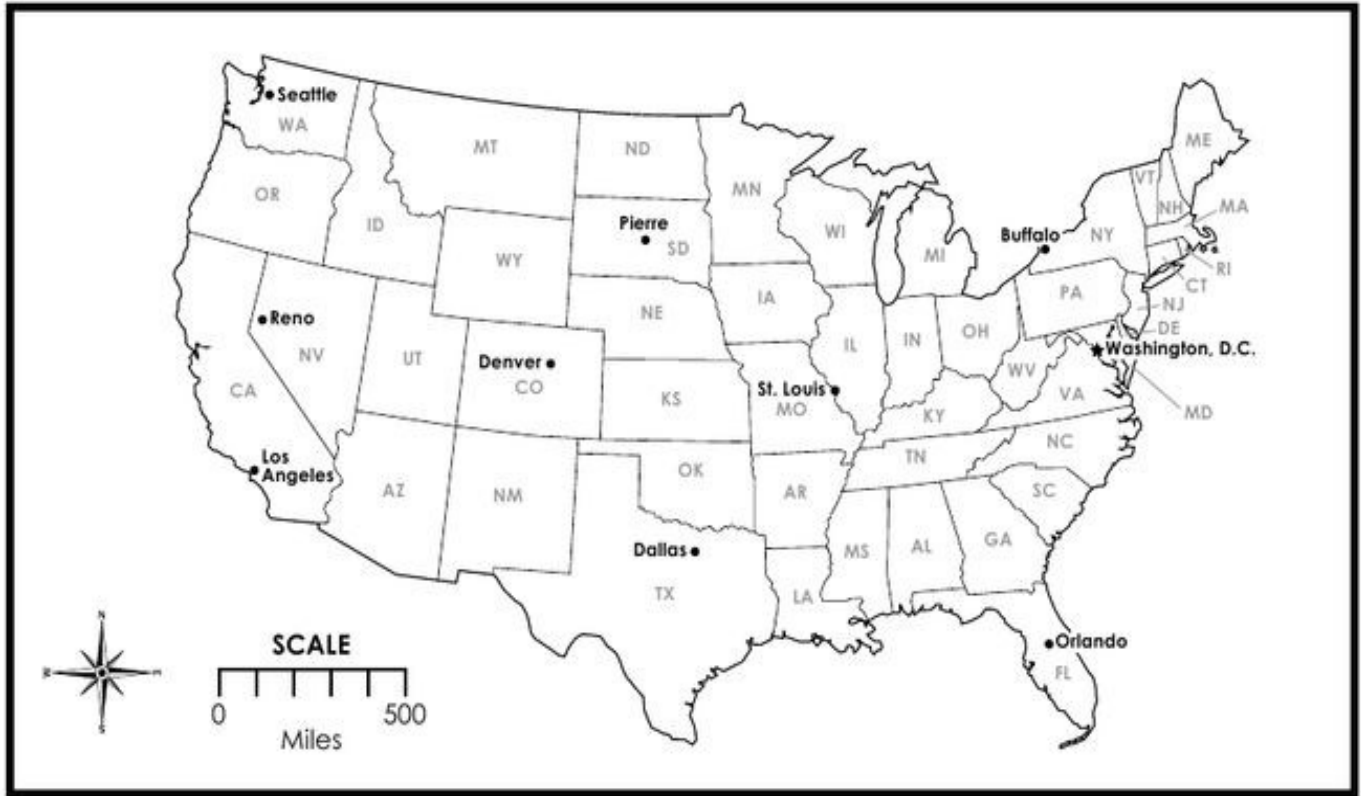


- | | |
|------------------------|--------------------------|
| 1) North America _____ | 8) Pacific Ocean _____ |
| 2) South America _____ | 9) Atlantic Ocean _____ |
| 3) Europe _____ | 10) Indian Ocean _____ |
| 4) Africa _____ | 11) Arctic Ocean _____ |
| 5) Asia _____ | 12) Southern Ocean _____ |
| 6) Australia _____ | |
| 7) Antarctica _____ | |

- 13) Which of these continents is closest to Europe?
- | | |
|------------------|------------------|
| A. North America | C. South America |
| B. Australia | D. Asia |
- 14) Which ocean touches Africa's western border?
- | | |
|-------------------|------------------|
| A. Atlantic Ocean | C. Indian Ocean |
| B. Arctic Ocean | D. Pacific Ocean |
- 15) Which continent is not touching any other continents?
- | | |
|------------------|-----------|
| A. North America | C. Europe |
| B. Australia | D. Africa |
- 16) Which ocean touches Africa's eastern border?
- | | |
|-------------------|-----------------|
| A. Pacific Ocean | C. Indian Ocean |
| B. Atlantic Ocean | D. Arctic Ocean |
- 17) Which of these continents is closest to Africa?
- | | |
|------------------|---------------|
| A. North America | C. Asia |
| B. South America | D. Antarctica |

Name: _____

Using a Map Scale



Use the scale on the map to answer the distance questions below. Draw a line between each pair of cities in each question. Use a different color for each one.

1. What is the approximate distance from Buffalo, NY to Orlando, FL? _____
2. What is the approximate distance from Dallas, TX to Denver, CO? _____
3. What is the approximate distance from Pierre, SD to Los Angeles, CA? _____
4. What is the approximate distance from St. Louis, MO to Reno, NV? _____
5. What is the approximate distance from Washington, DC to Seattle, WA? _____
6. If you flew from Buffalo, NY to St. Louis, MO and continued on by flying to Seattle, WA, then to Reno, NV then to Dallas, TX and then back to Buffalo, NY, what would be the total approximate miles traveled? _____